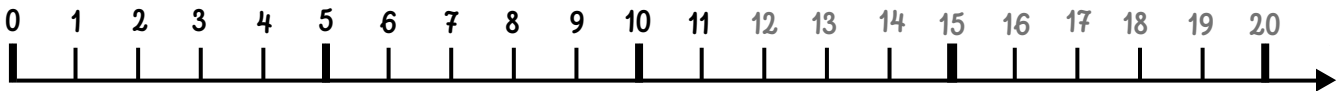
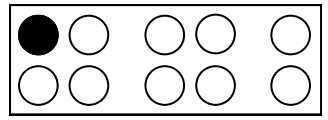

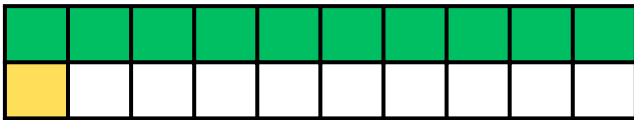






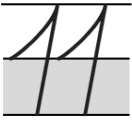


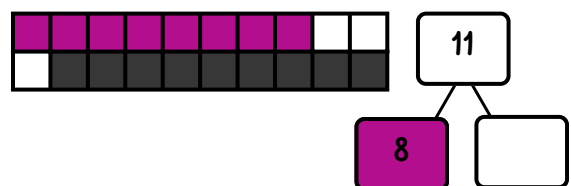
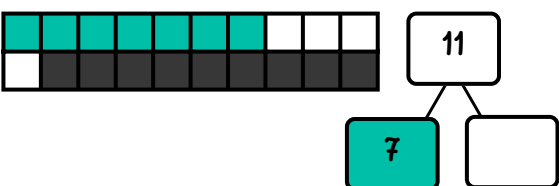
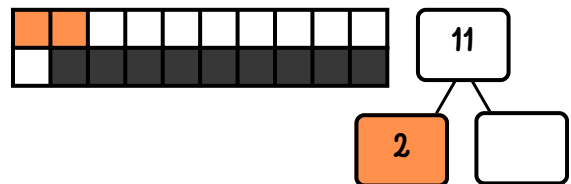
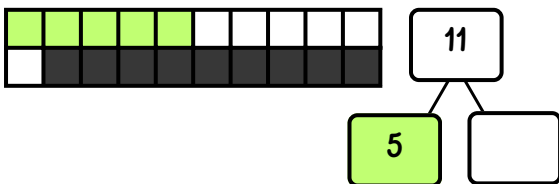
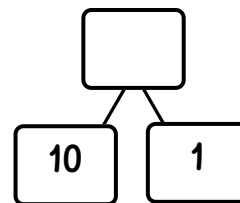
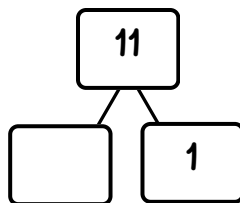
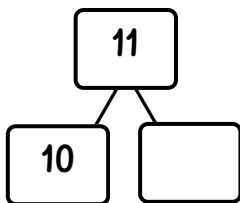
naam \_\_\_\_\_

# 11

elf



- net voor 11 staat .....
- net na 11 komt .....
- 11 staat tussen ..... en .....
- 11 is 1 meer dan .....
- 11 is 10 en .....
- 11 staat net voor .....

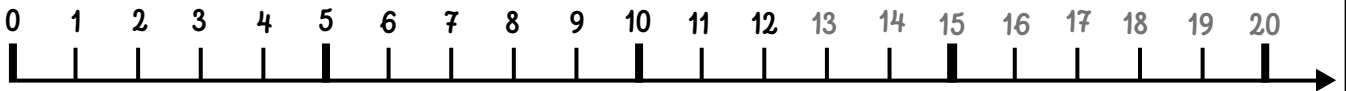

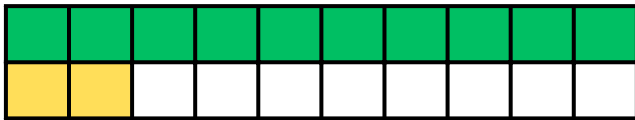


naam \_\_\_\_\_

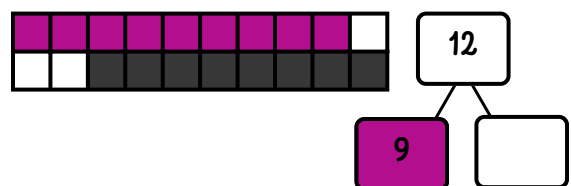
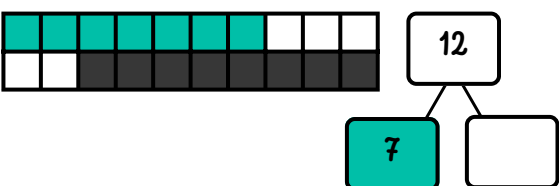
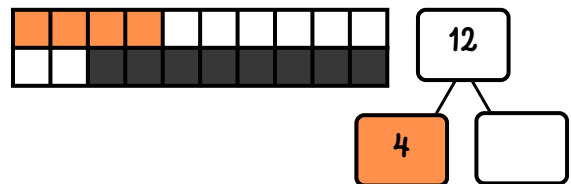
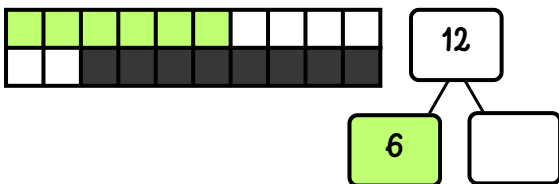
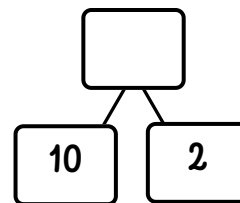
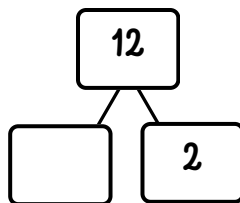
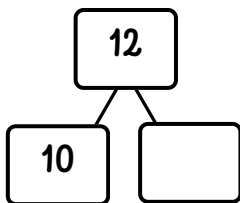
# 12

twaalf

12



- net voor 12 staat .....
- net na 12 komt .....
- 12 staat tussen ..... en .....
- 12 is het dubbel van .....
- 12 is 10 en .....
- 12 staat net voor .....

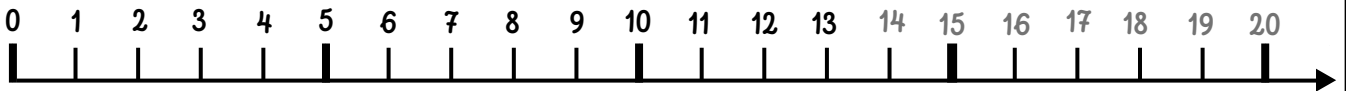
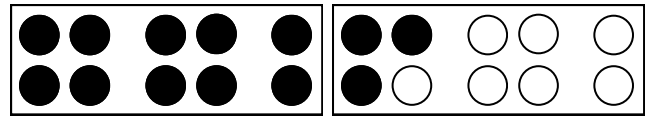


naam \_\_\_\_\_

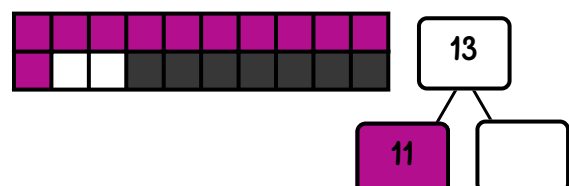
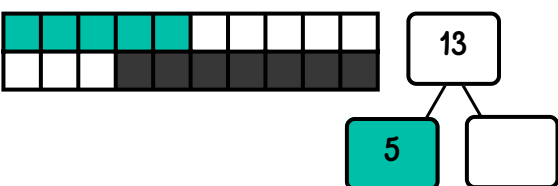
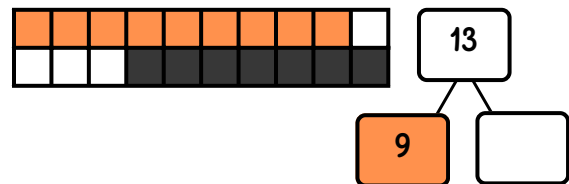
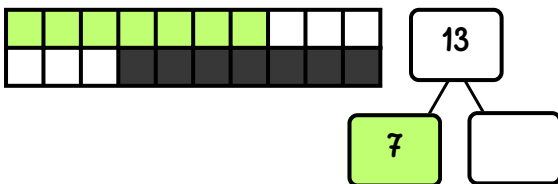
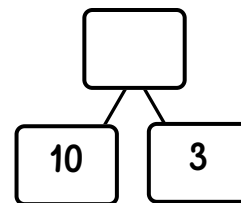
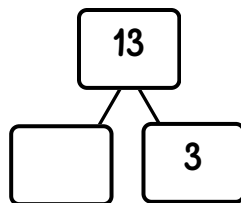
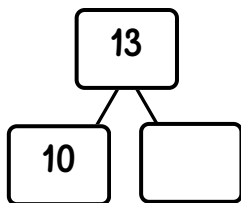
# 13

dertien

13



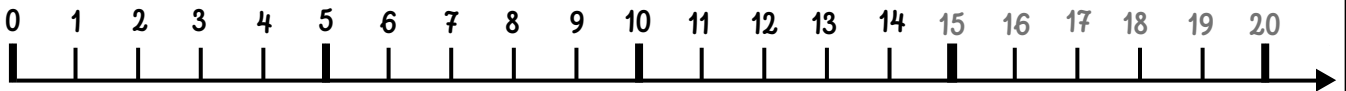

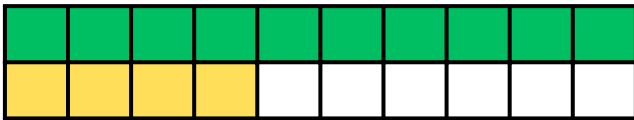
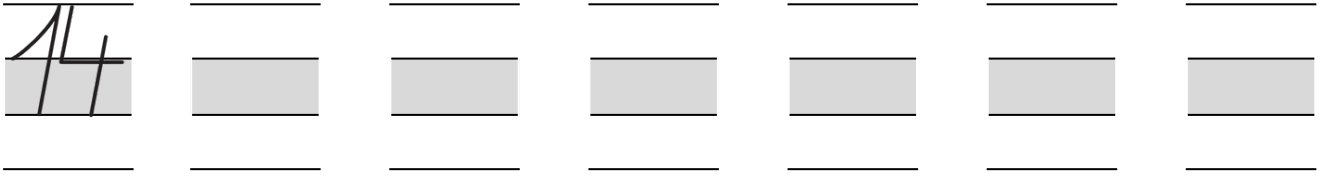
- net voor 13 staat .....
- net na 13 komt .....
- 13 staat tussen ..... en .....
- 13 is 1 meer dan .....
- 13 is 3 en .....
- 13 staat net voor .....



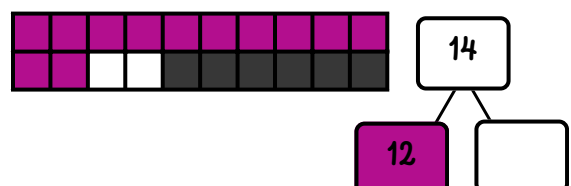
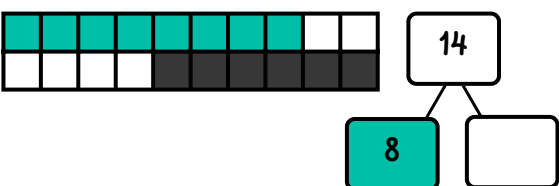
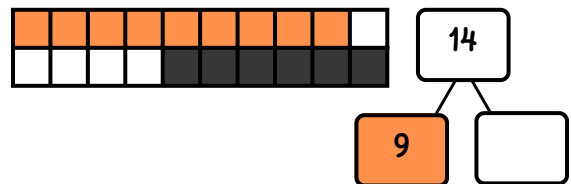
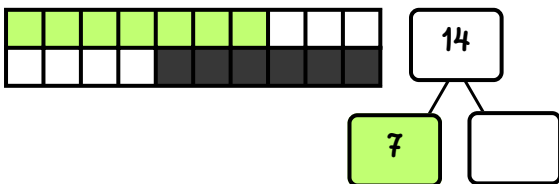
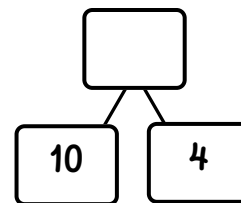
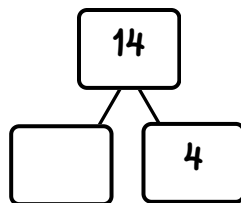
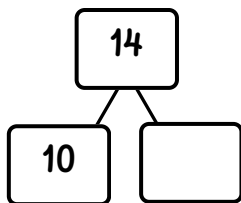
naam \_\_\_\_\_

# 14

veertien



- net voor 14 staat .....
- net na 14 komt .....
- 14 staat tussen ..... en .....
- 14 is het dubbel van .....
- 14 is 10 en .....
- 14 staat net voor .....



naam \_\_\_\_\_

# 15 vijftien

15

\_\_\_\_\_

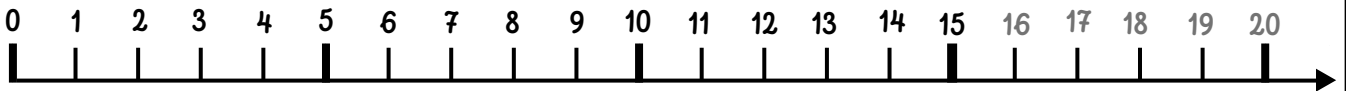

\_\_\_\_\_

\_\_\_\_\_

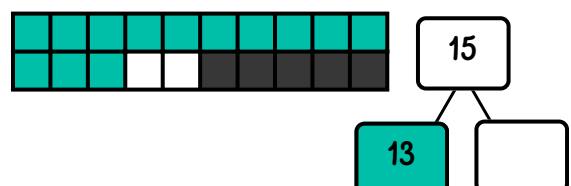
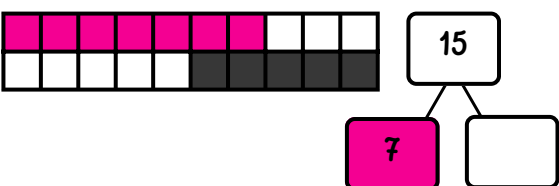
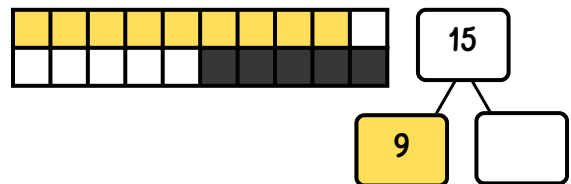
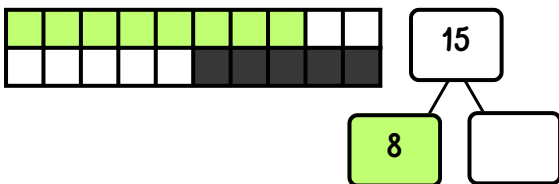
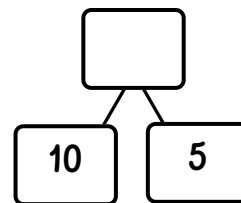
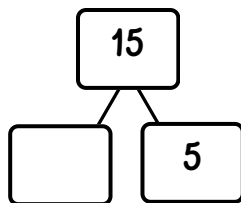
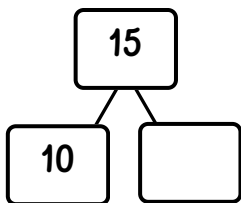
\_\_\_\_\_

\_\_\_\_\_

\_\_\_\_\_

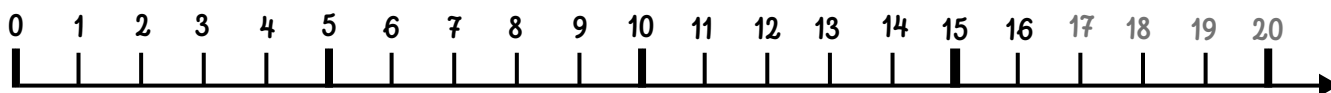
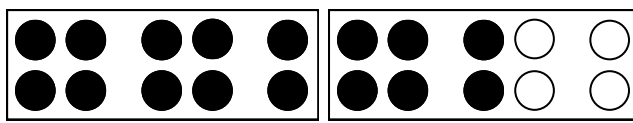
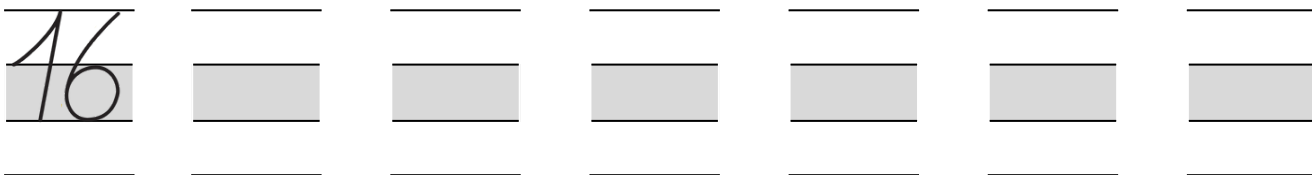


- net voor 15 staat .....
- net na 15 komt .....
- 15 staat tussen ..... en .....
- 15 is 1 meer dan .....
- 15 is 10 en .....
- 15 staat net voor .....

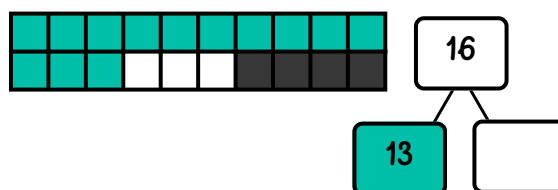
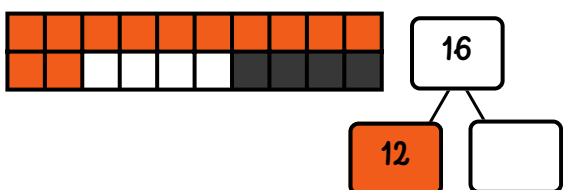
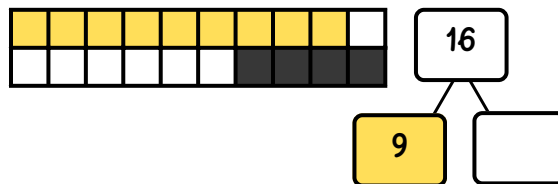
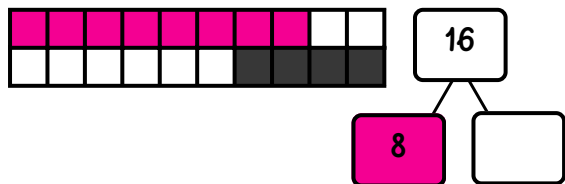
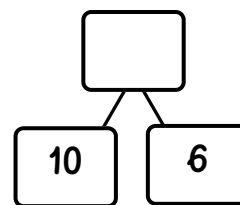
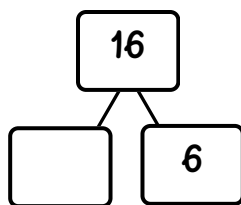
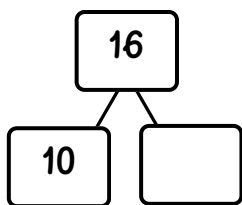


naam \_\_\_\_\_

# 16 zestien

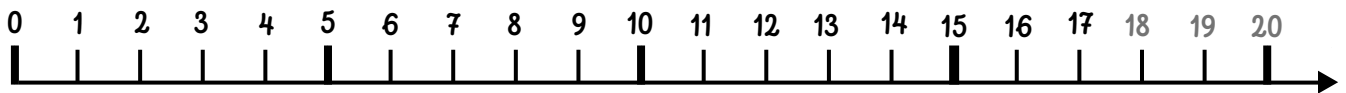
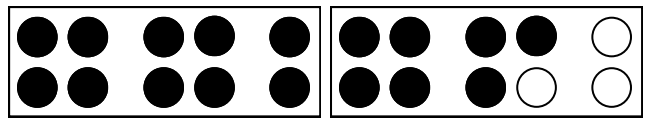
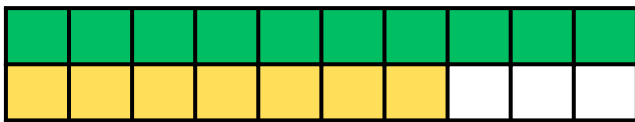
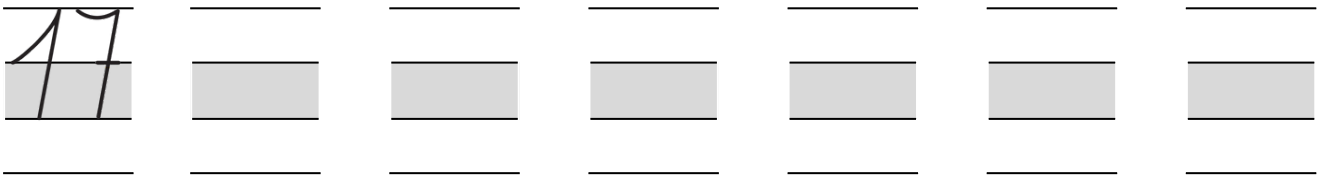


- net voor 16 staat .....
- net na 16 komt .....
- 16 staat tussen ..... en .....
- 16 is het dubbel van .....
- 16 is 10 en .....
- 16 staat net voor .....

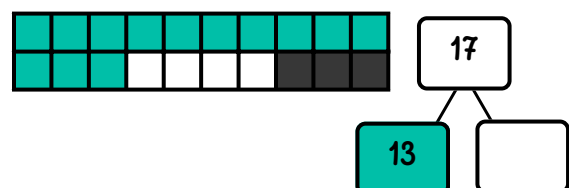
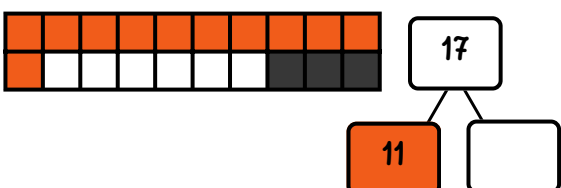
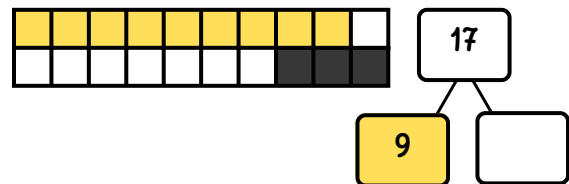
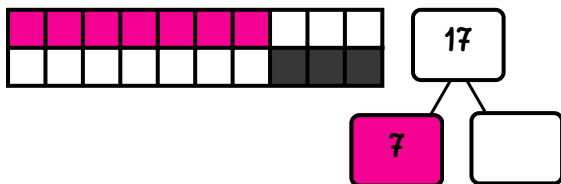
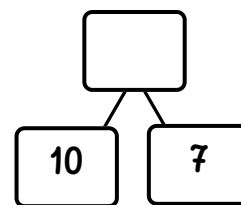
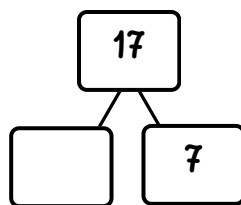
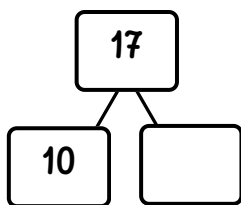


naam \_\_\_\_\_

# 17 zeventien



- net voor 17 staat .....
- net na 17 komt .....
- 17 staat tussen ..... en .....
- 17 is 1 meer dan .....
- 17 is 10 en .....
- 17 staat net voor .....



naam \_\_\_\_\_

# 18 achttien

18

\_\_\_\_\_

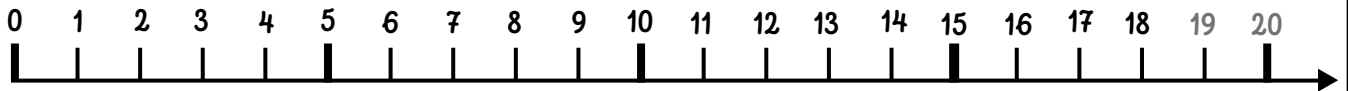

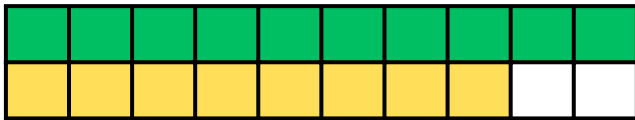
\_\_\_\_\_

\_\_\_\_\_

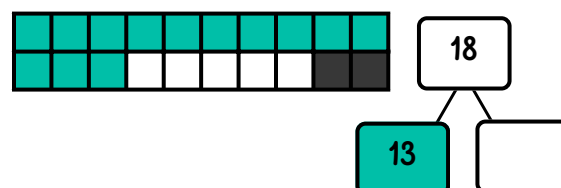
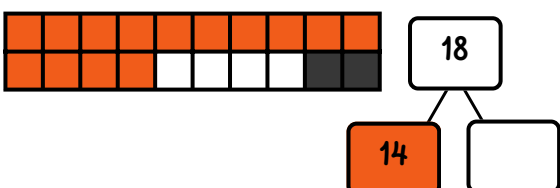
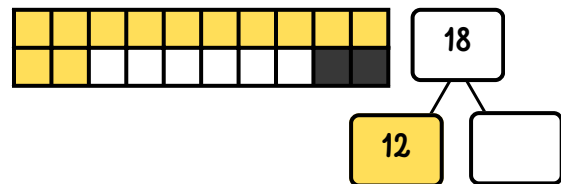
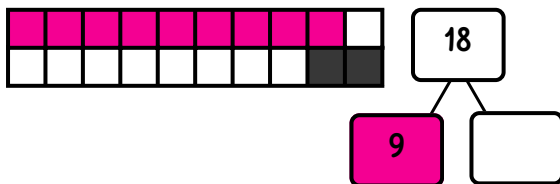
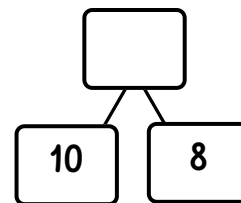
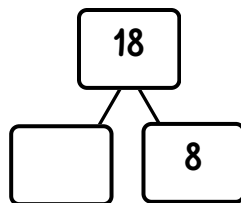
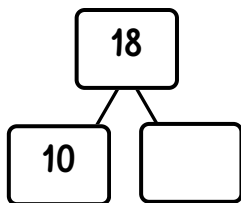
\_\_\_\_\_

\_\_\_\_\_

\_\_\_\_\_



- net voor 18 staat .....
- net na 18 komt .....
- 18 staat tussen ..... en .....
- 18 is het dubbel van .....
- 18 is 10 en .....
- 18 staat net voor .....





naam \_\_\_\_\_

# 19 negentien

19

\_\_\_\_\_

\_\_\_\_\_

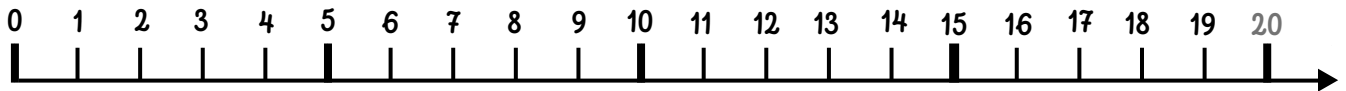

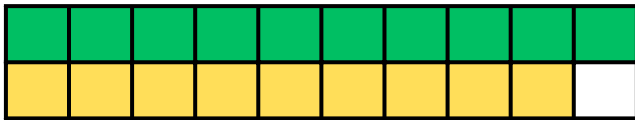
\_\_\_\_\_

\_\_\_\_\_

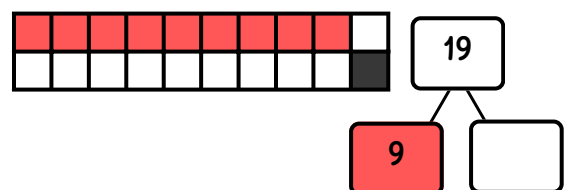
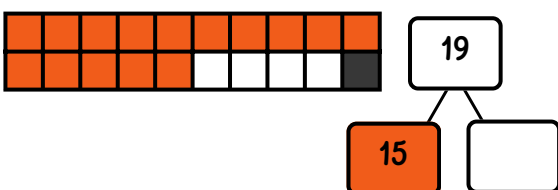
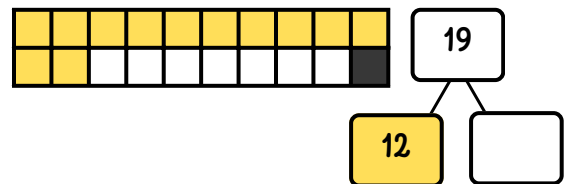
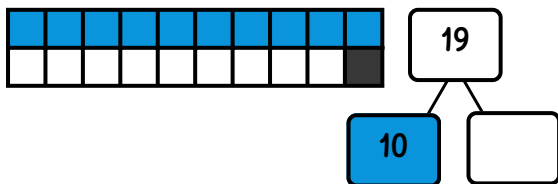
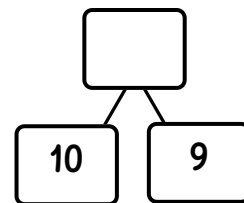
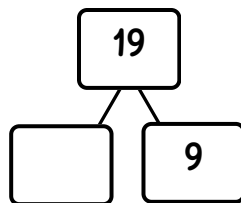
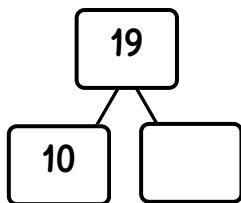
\_\_\_\_\_

\_\_\_\_\_

\_\_\_\_\_



- net voor 19 staat .....
- net na 19 komt .....
- 19 staat tussen ..... en .....
- 19 is 1 meer dan .....
- 19 is 9 en .....
- 19 staat net voor .....



naam \_\_\_\_\_

# 20 twintig

20

\_\_\_\_\_

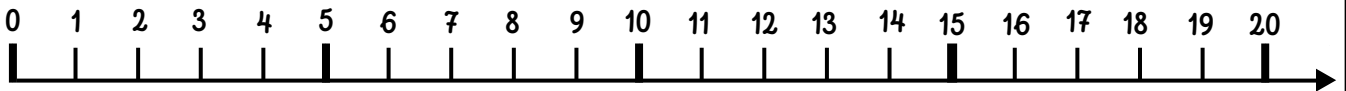


\_\_\_\_\_

\_\_\_\_\_

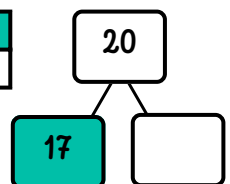
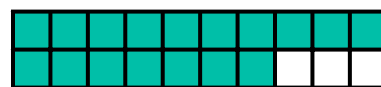
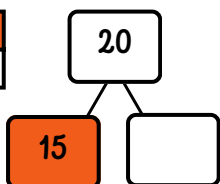
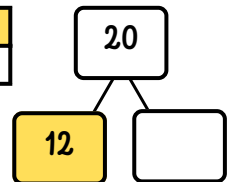
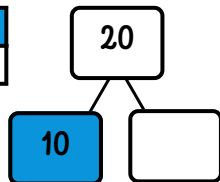
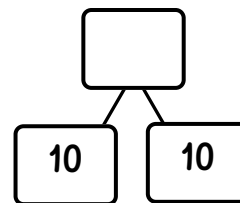
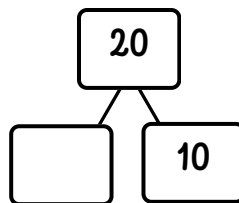
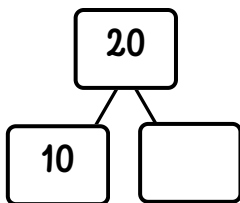
\_\_\_\_\_

\_\_\_\_\_

\_\_\_\_\_



- net voor 20 staat .....
- 20 is 1 meer dan .....
- 20 staat net na .....
- 20 is 10 en .....
- 20 is het dubbel van .....
- $20 = 10 + \dots$



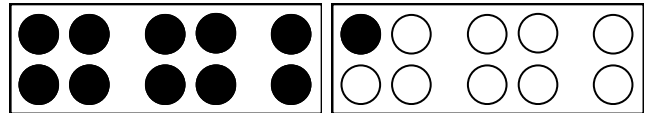
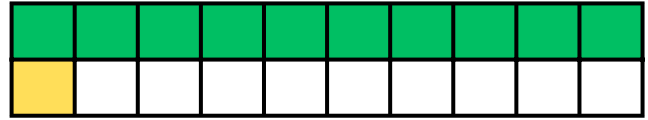
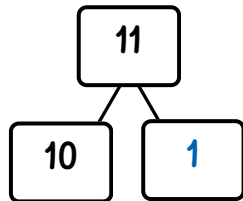
naam \_\_\_\_\_

# VAN 11 TOT 15

voorbeeld

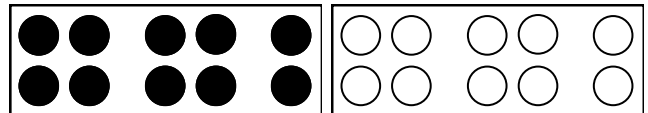
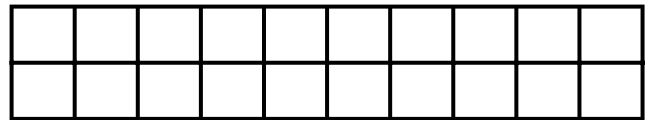
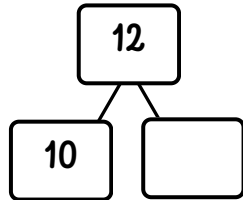
elf

11 11



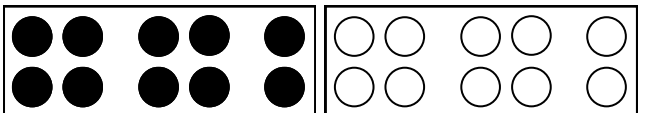
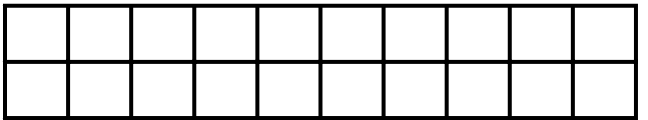
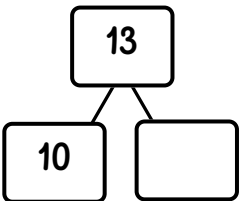
twaalf

12



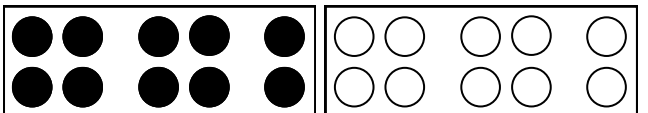
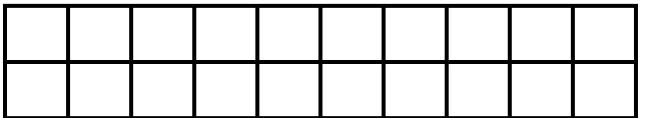
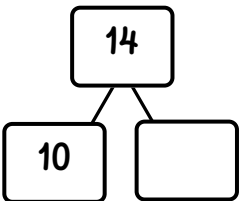
dertien

13



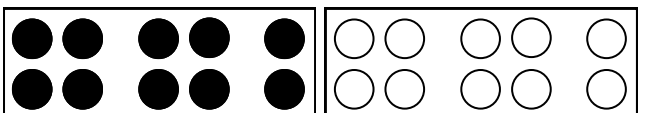
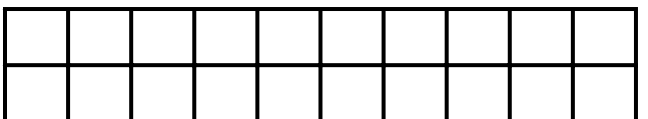
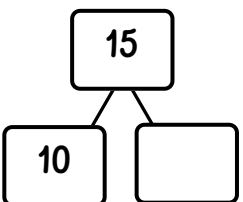
veertien

14



vijftien

15

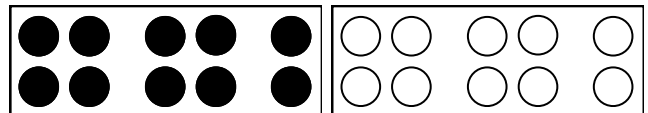
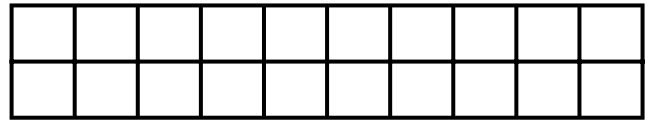
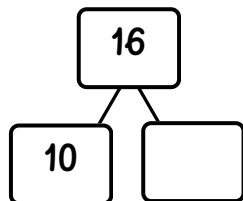


naam \_\_\_\_\_

# VAN 16 TOT 20

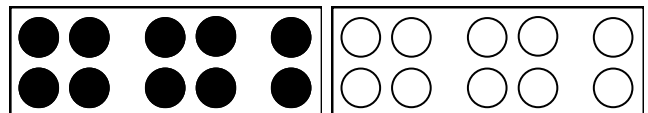
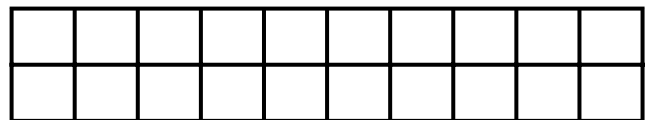
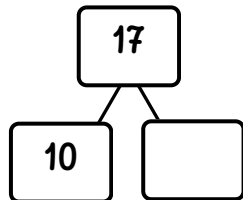
zestien

16



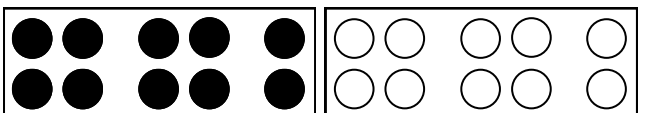
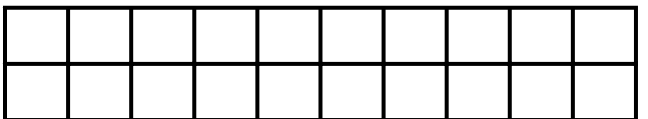
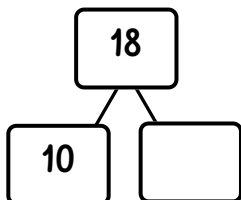
zeventien

17



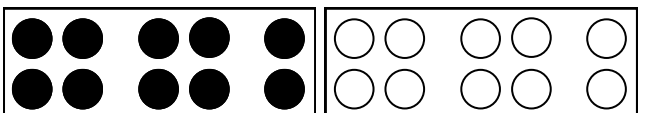
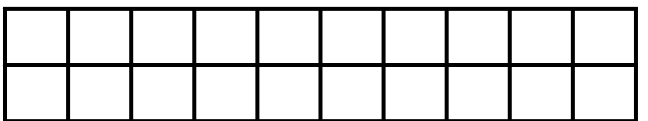
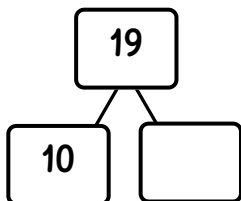
achttien

18



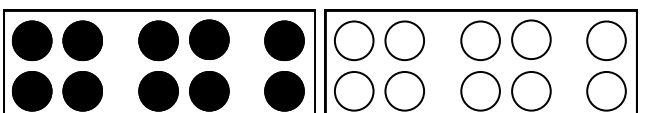
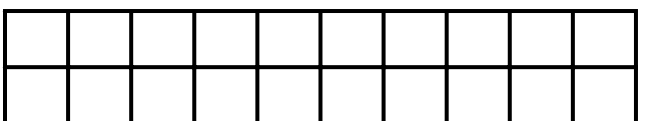
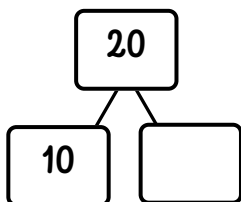
negentien

19



twintig

20



naam \_\_\_\_\_

# DIT IS...

● ● ● ● ●	= .....
● ● ● ● ●	
● ○ ○ ○ ○	= .....
○ ○ ○ ○ ○	

● ● ● ● ●	= .....
● ● ● ● ●	
● ● ● ○ ○	= .....
● ● ○ ○ ○	

● ● ● ● ●	= .....
● ● ● ● ●	
● ● ● ● ○	= .....
● ● ● ○ ○	

● ● ● ● ●	= .....
● ● ● ● ●	
● ● ○ ○ ○	= .....
● ○ ○ ○ ○	

● ● ● ● ●	= .....
● ● ● ● ●	
● ● ○ ○ ○	= .....
● ● ○ ○ ○	

● ● ● ● ●	= .....
● ● ● ● ●	
● ● ● ● ○	= .....
● ● ● ● ○	

● ● ● ● ●	= .....
● ● ● ● ●	
● ● ● ● ●	= .....
● ● ● ● ●	

● ● ● ● ●	= .....
● ● ● ● ●	
● ○ ○ ○ ○	= .....
● ○ ○ ○ ○	

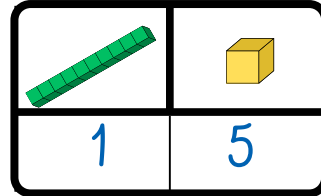
● ● ● ● ●	= .....
● ● ● ● ●	
● ● ● ○ ○	= .....
● ● ● ○ ○	

● ● ● ● ●	= .....
● ● ● ● ●	
● ● ● ● ●	= .....
● ● ● ● ○	

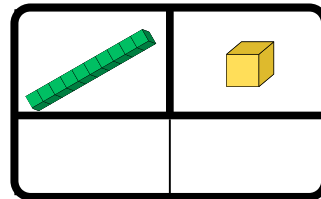
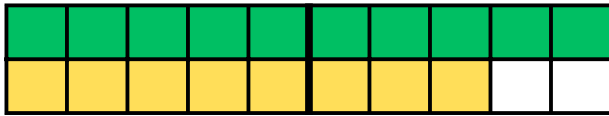
naam \_\_\_\_\_

# HOEVEEL STAAT ER

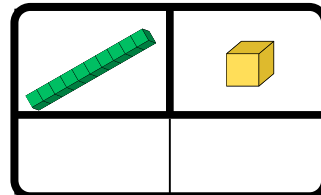
*voorbeeld*



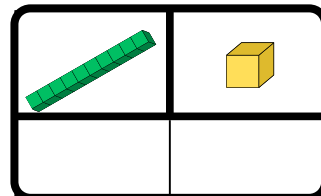
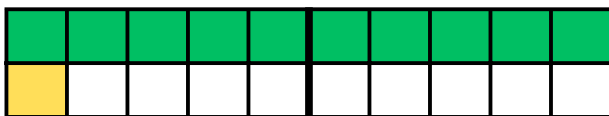
= 15



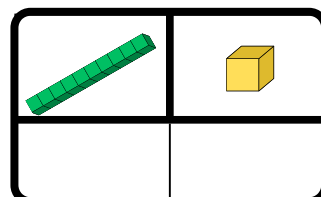
= .....



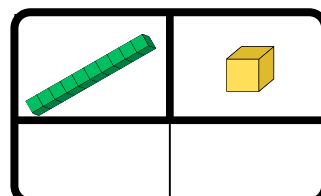
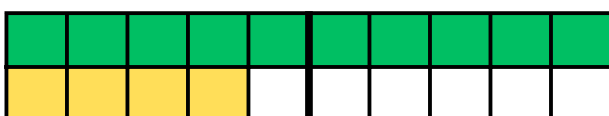
= .....



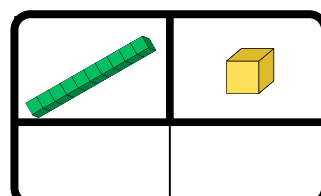
= .....



= .....



= .....




= .....


naam \_\_\_\_\_

# HOEVEEL ZIJN ER

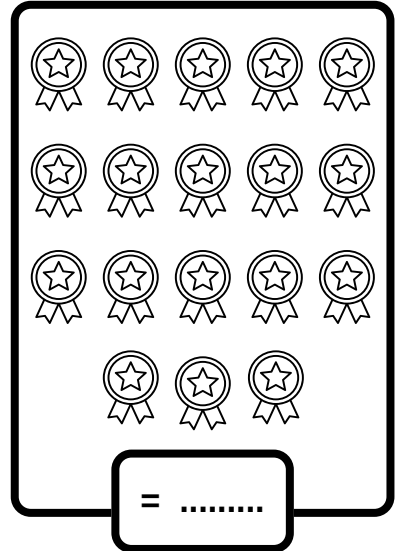
voorbeeld




= 17




= .....




= .....




= .....




= .....




= .....



= .....



= .....



= .....

naam \_\_\_\_\_

# IK VUL AAN

1	2	.....	.....	5	.....	.....	.....	.....	10
.....	12	.....	.....	.....	.....	17	18	.....	.....

13	14			17	
----	----	--	--	----	--

• net na 14 komt .....

• net voor 12 komt .....

7	8				12
---	---	--	--	--	----

			11		13
--	--	--	----	--	----

• net na 11 komt .....

• 16 staat tussen ..... en .....

	16				20
--	----	--	--	--	----

	7	8			11
--	---	---	--	--	----

• net voor 11 komt .....

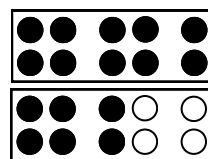
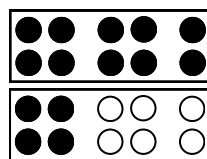
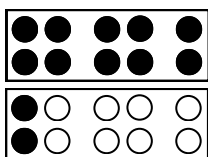
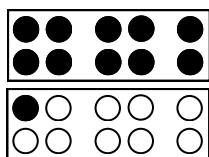
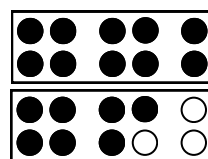
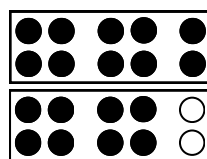
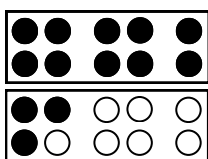
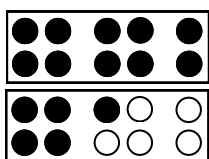
• net voor 19 komt .....

				19	20
--	--	--	--	----	----



naam \_\_\_\_\_

# VUL IN MET > OF = OF <



13  18

20  18

6  12

9  11

8  13

14  13

16  14

15  16

19  16

20  10

18  20

14  18

12  19

14  7

17  12

naam \_\_\_\_\_



# VAN MINDER NAAR MEER

voorbeeld

11 | 3 | 16 | 20 | 1

$$\boxed{1} < \boxed{3} < \boxed{11} < \boxed{16} < \boxed{20}$$

15 | 5 | 10 | 20 | 1

$$\boxed{\phantom{00}} < \boxed{\phantom{00}} < \boxed{\phantom{00}} < \boxed{\phantom{00}} < \boxed{\phantom{00}}$$

9 | 18 | 4 | 13 | 16

$$\boxed{\phantom{00}} < \boxed{\phantom{00}} < \boxed{\phantom{00}} < \boxed{\phantom{00}} < \boxed{\phantom{00}}$$

17 | 7 | 14 | 4 | 11

$$\boxed{\phantom{00}} < \boxed{\phantom{00}} < \boxed{\phantom{00}} < \boxed{\phantom{00}} < \boxed{\phantom{00}}$$

6 | 12 | 2 | 19 | 13

$$\boxed{\phantom{00}} < \boxed{\phantom{00}} < \boxed{\phantom{00}} < \boxed{\phantom{00}} < \boxed{\phantom{00}}$$

16 | 8 | 10 | 11 | 20

$$\boxed{\phantom{00}} < \boxed{\phantom{00}} < \boxed{\phantom{00}} < \boxed{\phantom{00}} < \boxed{\phantom{00}}$$

naam \_\_\_\_\_



# VAN MEER NAAR MINDER

voorbeeld

11 | 3 | 16 | 20 | 1

$$\boxed{20} > \boxed{16} > \boxed{11} > \boxed{3} > \boxed{1}$$

15 | 5 | 10 | 20 | 1

$$\boxed{\phantom{00}} > \boxed{\phantom{00}} > \boxed{\phantom{00}} > \boxed{\phantom{00}} > \boxed{\phantom{00}}$$

8 | 17 | 3 | 12 | 15

$$\boxed{\phantom{00}} > \boxed{\phantom{00}} > \boxed{\phantom{00}} > \boxed{\phantom{00}} > \boxed{\phantom{00}}$$

16 | 6 | 13 | 3 | 10

$$\boxed{\phantom{00}} > \boxed{\phantom{00}} > \boxed{\phantom{00}} > \boxed{\phantom{00}} > \boxed{\phantom{00}}$$

7 | 11 | 1 | 20 | 12

$$\boxed{\phantom{00}} > \boxed{\phantom{00}} > \boxed{\phantom{00}} > \boxed{\phantom{00}} > \boxed{\phantom{00}}$$


14 | 18 | 9 | 11 | 20

$$\boxed{\phantom{00}} > \boxed{\phantom{00}} > \boxed{\phantom{00}} > \boxed{\phantom{00}} > \boxed{\phantom{00}}$$

naam \_\_\_\_\_

# HET TWINTIGVELD

1	2	3	4	5	6	7	8	9	10
11	12	13	14	15	16	17	18	19	20



1	2	
11		13

7	8	
	18	

	4		6
13		15	

	7		
16		18	

	5	
14		16

1	2	

	9	
18		20

	8		10
		19	

			10
17			20