























1  	2  	3  	4  	5  	6  
7 	8  	9 	10  	11  	12  



hoeveel zie je?

20	8	13	19	11	16
12	18	14	17	15	7

1 9	2 17	3 16	4 13	5 12	6 11
7 15	8 18	9 14	10 10	11 20	12 19



getallen tot 20 ordenen









juist voor 20 staat ...	juist voor 18 staat ...	juist na 15 staat ...	juist na 13 staat ...	juist voor 14 staat ...	juist voor 11 staat ...
tussen 10 en 12 staat ...	tussen 17 en 19 staat ...	juist na 11 komt ...	juist na 19 komt ...	tussen 14 en 16 staat ...	tussen 8 en 10 staat ...


1 12	2 14	3 15	4 18	5 16	6 13
7 17	8 8	9 9	10 19	11 20	12 11




optellen tot 20

$16+1=$	$10+9=$	$13+3=$	$10+10=$	$10+1=$	$3+5=$
$14+4=$	$10+2=$	$12+3=$	$4+5=$	$10+3=$	$12+2=$

1 	2 4	3 	4 	5 	6 6
7 	8 8	9 	10 	11 	12 2



zoek het dubbel

het dubbel van 	het dubbel van 	het dubbel van 	het dubbel van 	het dubbel van 3 is	het dubbel van 2 is
het dubbel van 	het dubbel van 	het dubbel van 	het dubbel van 	het dubbel van 1 is	het dubbel van 4 is